




# Geography

## Marvellous Maps

# Compass Points



# Aim

- I can use the eight compass points to describe routes on a map.


# Success Criteria

- I can tell you the eight compass points.
- I can follow directions using the eight compass points.
- I can give directions using the eight compass points.

# What Do You Already Know?



What do you know about compass directions?



Watch this short animation to remind yourselves.

# Where Shall We Go?



How could you get from the parrot to the flag?

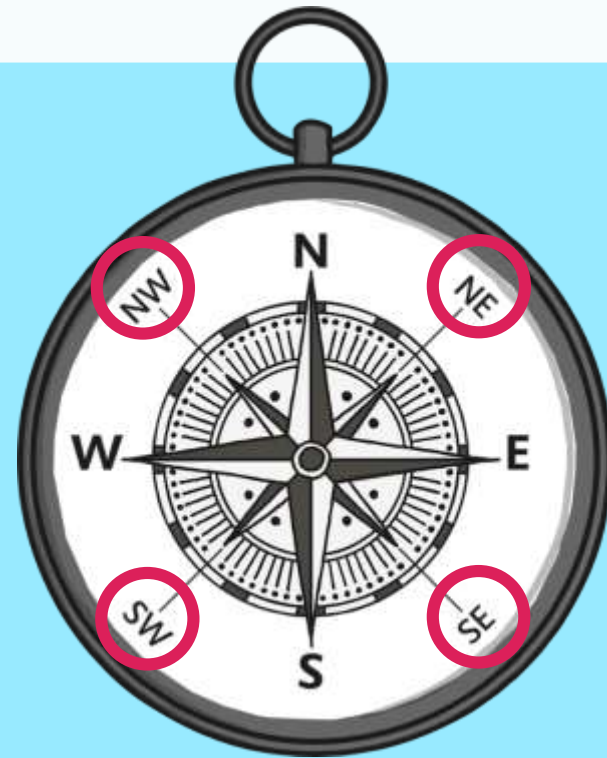
What about from the cutlass (sword) to the forest?

How could you get from the palm trees to the treasure?

# Where Shall We Go?



Can you explain how each point got its name?



# Where Shall We Go Now?




How could you get from the palm trees to the treasure?

How could you get from the coins to the volcano?

How could you get from the forest to the palm trees and then to the flag?

# Giving Directions



Now it's your turn!

Use your map to give directions between two (or more!) places. E.g; church to bakery: East 2 spaces, north 1 space



For the 3 star activity, use all 8 compass points: E.g pool to beach: 1 space south-east.

# Challenge!



By drawing diagrams, can you show how you found the directions of areas in the UK in relation to one another. (Use any of the 8 compass points)



Watch this short animation to remind yourselves.

AIM-I can use the eight compass points to describe routes on a map.

## Main learning task:

Follow the Power Point and then choose the 1,2 or 3 star activity sheet.

The additional 3 star sheet with the map of the UK is to show you can give compass directions by drawing diagrams. You don't need to know where on the map each place is.

# Challenge (optional)

**For an extra challenge, try the counties of England worksheet!**

